



Sindhi High School, Bengaluru-01

Worksheet-3 (2024-25)

Subject : English



Name: _____

Date: 21 / 11 / 2024

Class: 1 A / B / C

Marks: 20

Roll No. _____

Reading Time: 8.00 am - 8.10 am

No. of sides: 3

Writing Time: 8.10 am - 9.10 am

Section A- Reading

A. Read the following passage and answer the questions given below: (1x3=3)

Sunny is an intelligent boy. He is only ten years old. He likes music the most. He wants to be a musician. He is a good piano player. He plays the piano in his free time. His father gifted him this piano on his last birthday.

Choose the Right answer:-

1. What is Sunny's favorite hobby?

- a) Music
- b) Painting

Fill in the blanks:-


2. Sunny wants to be a _____.

3. Sunny's father gifted him a _____ on his last birthday.

Section B- Creative Writing and Grammar

A. Look at the picture carefully. Write three sentences about it: (1X3=3)

The Rainbow



Grammar

B) Underline the noun's in the following sentences:

(1x2=2M)

1. Reema has flowers.
2. Our school is very good.
3. Ram is an obedient boy.
4. This is my new box.

C) Give the genders for the following words:

(1x3=3M)

1. mare-
2. girl-
3. prince-

D) Fill in the blanks with This, That, Those or These :

(1x3=3M)

1. _____ is a doll



2. _____ are my books.



3. _____ is a bell.



SECTION C - LITERATURE

A. Answer the following:

(1x4=4)

1. What does Aunt Katie do when Daisy moo's loudly?

A. _____

2. Why is the Kite naughty?

A. _____

3. Why is Jim afraid of Daisy?

A. _____

4. Where does the Kite gets stuck?

A. _____

B. Fill in the blanks:

1. The Children climb up the _____.

2. Jim likes the _____ hens.



Sindhi High School, K.K. Road Bengaluru -01

Worksheet 3 (2024 – 2025)

II language Kannada



Class – 1 A/B/C

Date: 11.11.2024

Name - _____

Max Marks - 20


Roll No - _____

Reading time – 8:00 to 8:10

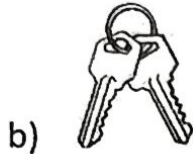
No of printed sides – 03

Writing time – 8:10 to 9:10

1. Identify the given picture and circle the correct word. (2)



a)



b)



c)



d)

ಬೀಗ / ರೀತಿ

ವೀರ / ಕೀಲಿ

ನಗು / ಗುರು

ಕೂದಲು / ಪೂರಿ

2. Choose the correct rhyming word and write. (2)

(ದೂರು , ನಗು , ಗೀತಾ , ಗುರಿ)

a) ಮಗು - _____

b) ನೀತಾ - _____

c) ಕುರಿ - _____

d) ನೂರು - _____

3. Change the gender. (2)

a) ಹುಡುಗ - _____

b) ಯುವಕ - _____

c) ಮಾಮಾ - _____

d) ಮುದುಕ - _____

4. Match the following. (2)



a)



b)



c)



d)

a) ಮೂಗು

b) ಕೀಟ

c) ಹೂವು

d) ಹುಲಿ

(1)

5. Identify the pictures and complete the sentences. (2)

a) _____ ಗಿರಿಗಿರಿ ತಿರುಗಿತು.



b) ಇದು ಮಗುವಿನ _____



c) ನೀತಾ _____ ತಾ.



d) ಕಿಟಕಿಯ ಬಳಿಯ _____




6. Write the given words in the correct place. (3)

ಶೀತ, ಹುಲಿ, ಪೂರಿ, ಹುಳಿ, ರೂಪ, ಚೀಟಿ

Gudisina deerga

kombu

kombinili



7. Change into phural. (3)

a) ಹುಲಿ - _____ b) ಕುರಿ - _____

c) ದೀಪ - _____ d) ಬೀದಿ - _____

e) ಚೀಲ - _____ f) ಕೀಟ - _____

8. Read the given passage and complete the sentences. (4)

ಇದು ಸೀತಾಳ ಸದನ . ಕೂಸಿನ ನಗು ಕಿಲಕಿಲ . ಹುಡುಗನ ಆಟ ಬಹಳ . ನೀತಾ
ಹೂವು ತಾ . ಹಾವಿನ ಓಟ ಸರಸರ . ಅಮರನ ಬೀದಿ ದೂರ .

a) ಇದು ಸೀತಾಳ _____

b ಕೂಸಿನ ನಗು _____

c) _____ ಹೂವು ತಾ .

d) ಹಾವಿನ ಓಟ _____ .

+++++



Sindhi High School, K.K. Road Bengaluru -01

Worksheet 3 (2024 – 2025)

Additional language Hindi



Class – 1 A/B/C

Date: 22. 11 . 2024

Name - _____

Max Marks - 20

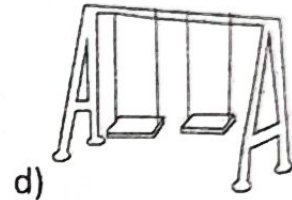

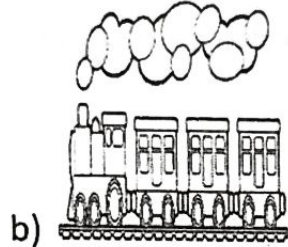

Roll No - _____

Reading time – 8:00 to 8:10


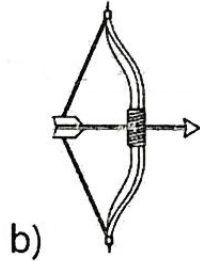
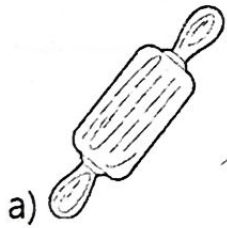
No of printed sides – 03

Writing time – 8:10 to 9:10

1. Identify the picture and write the names in Hindi. (2)



2. Match the following. (2)



a) कबूतर

b) बेलन

c) मेज

d) धनुष

3. Draw the pictures for the given words. (2)

पेड़	केक	चूहा	जुराब

(1)

4. Circle only ए ki मात्रा words . (2)

दुकान , शुभ , रेत , खूब , देश , नाखून , रमेश , देर , घर

5. Change into plural. (2)

a) केला - _____ b) ताला - _____

c) चूहा - _____ d) जूता - _____

6. Choose the correct rhyming word and write. (2)

(आलू , ठेला , खेल , कुल)

a) मेला - _____ b) बेल - _____

c) पुल - _____ d) भालू - _____

7. Identify the pictures and complete the sentences. (2)

a) _____ हुई।



b) आशु , _____ ला।



c) रवि _____ पहन।



d) _____ भाग गया।



8) Circle the odd one out. (2)

a) रेल , मेल , खेल , दिनेश

b) महेश , रमेश , आलू , गणेश

c) भूल , दूध , मूल , फूल

d) साबुन , बुन , घुन , धुन


9) Choose the correct letter and complete the word. (2)


a) _____ डिया (गु , गू)



b) _____ लाब जामुन (गू , गु)



c) _____ रगी (मु, मू) 

d) लाल _____ न (ठे टे) 

10. Read the given passage and complete the sentences. (2)

साबुन लगाकर नहा। सुमा जामुन खा। राजू जूता पहनकर बाज़ार जा। तरबूज़ खाकर झूला झूल। रमेश के घर महेश आए। सबने जलेबी खाई।

a) राजू जूता पहनकर _____ जा।

b) रमेश के घर _____ आए।

c) सबने _____ खाई।

d) _____ लगाकर नहा।

+++++



Sindhi High School, KK Road, Bengaluru-01.

Worksheet- 3 - 2024-25

Subject: Mathematics



Name: _____

Date: 18/11/2024

Class: 1A /B /C

Marks: 20

Roll No: _____

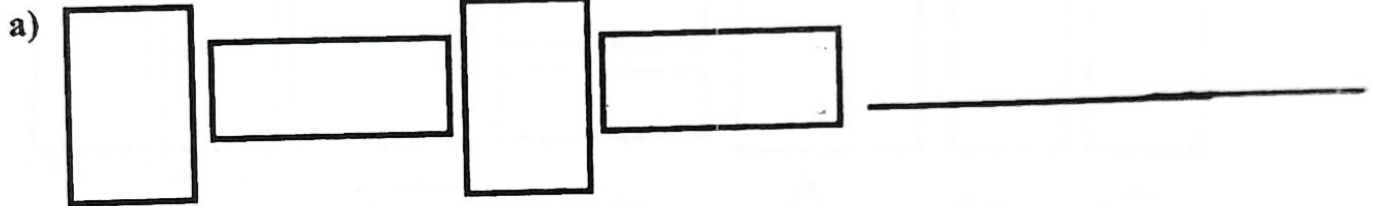
Reading Time: 8am-8.10 am

No of printed sides: 4

Writing Time: 8.10am-9.10am

I. Complete the patterns: -

(1 X 2 = 2)



II. Complete the number pattern: -

(1 X 2 = 2)

1) 12	14	16	18	_____	_____
2) 45	40	35	30	_____	_____


III. Complete the alphabetical pattern: -

(1 X 2 = 2)

- 1) A C E G _____ _____ M
 2) uu vv ww _____ _____ zz

IV. Colour the circles green, the rectangles blue, the squares yellow and the triangles red: -

(1 X 4 = 4)

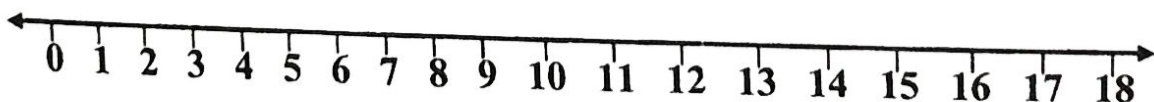


- 1) How many circles are there?
- 2) How many squares are there?
- 3) How many triangles are there?
- 4) How many rectangles are there?

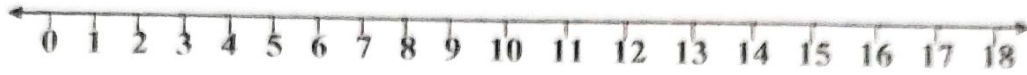
V. Subtraction using the number line : -

(1 X 2 = 2)

a) $15 - 8 =$



b) $13 - 7 =$



VI. Fill in the Blanks : -

($\frac{1}{2} \times 6 = 3$)

a) $18 - 6 =$

b) $12 - 4 =$

c) $60 - 60 =$

d) $10 - 0 =$

e) $15 -$ $= 14$

f) $7 -$ $= 0$

VII. Fill in the Blanks : -

($1 \times 2 = 2$)

1)

	T	O
	1	8
-	0	5

2)

	T	O
	6	3
-	4	1

VIII. Story sums : -

(1.5 X 2 = 3)

- a) There are 7 ducks in a pond. 2 of them move away. How many ducks are left in the pond ?

Number of ducks in a pond = _____

Number of ducks that moved away = _____

Number of ducks left in the pond = _____

- b) Amit has 19 pencils. He gave 10 pencils to Anil. How many pencils are left with him?

Number of Pencils Amit has = _____

Number of Pencils he gave to Anil = _____

Number of Pencils left with Amit = _____



Sindhi High School K.K. Road Bengaluru -01

Worksheet-3(2024-25)

Subject: EVS



Name: _____

Date: 20/11/2024

Class: I A/ B/ C

Marks: 20

Roll no: _____

Reading Time: 8.00 am - 8.10 am

No of sides printed: 3

Writing Time: 8.10 am - 9.10 am

QI. Fill in the blanks:

(1x4=4)

1. A _____ waters and takes care of plants.
2. A _____ delivers letters for us.
3. We _____ with our skin.
4. A _____ stitches our clothes.

QII. True or False:

(1/2x4=2)

1. We should talk to strangers. - _____
2. The person who treats sick animals is called a veterinary doctor. - _____
3. We should take bath daily. - _____
4. Tailor cuts our hair. - _____

QIII. Identify and circle the part of the body:

(1/2x4=2)



Ear

Skin

Tongue



Nose

Toes

Hair

Lips

Wrist

Leg



V/L. Name



Eyes

Ears

Shoulder

QIV. Answer the following questions:

(2x3=6)

Q1. Who are known as community helpers? Give one example.

A1. _____

Q2. Write two ways to keep yourself clean.

A2. _____

Q3. Name the body part shown in the picture and write its use.



A3. _____

QV. Circle the correct option:

(1x4=4)

- | | |
|--------------------------------|-----------------------|
| a) Teaches children | : Conductor / Teacher |
| b) Mends the shoes | : Cobbler / Driver |
| c) Makes furniture | : Postman / Carpenter |
| d) Catches thieves and robbers | : Policeman / Barber |

VI. Name the given pictures and colour them:

(1x2=2)

